


Test #5


- kvintcirkel, tonearter, blues, skalaer

navn: _____

Opgave 1 - udfyld denne kvintcirkel - både dur & mol-siden - og skriv antal fortegn :



Opgave 2 - hvad er tonearten - grundtonen er opgivet (OBS nøglen):



1

Opgave 3 - skriv akkorderne til en BLUES - a) med trin:
b) skriv bagefter akkorderne til en blues i D-dur:



6




10



14


Opgave 4 - skalaer: Skriv 4 skalaer, dur, dur-pentaton, molpentaton og blues - alle ud fra D. BRUG KUN LØSE FORTEGN

a) D-dur




18

b) D dur-pentaton




19

c) D mol-pentaton



20

d) D blues



21